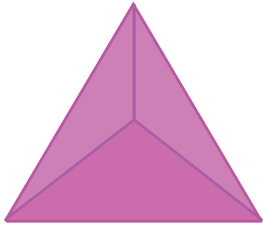


## Faces, Edges & Vertices

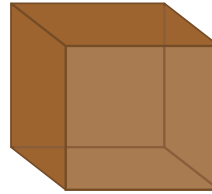
Write the name of each shape. Also, find the number of faces, edges and vertices.

1)

Faces Edges Vertices 

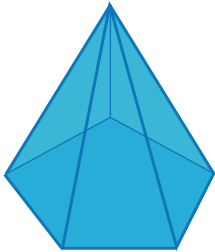
Name: \_\_\_\_\_

2)

Faces Edges Vertices 

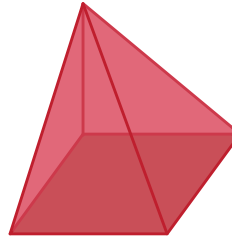
Name: \_\_\_\_\_

3)

Faces Edges Vertices 

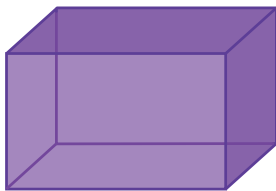
Name: \_\_\_\_\_

4)

Faces Edges Vertices 

Name: \_\_\_\_\_

5)

Faces Edges Vertices 

Name: \_\_\_\_\_

6)

Faces Edges Vertices 

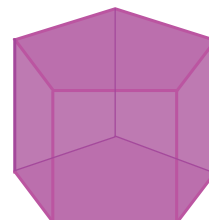
Name: \_\_\_\_\_

7)

Faces Edges Vertices 

Name: \_\_\_\_\_

8)

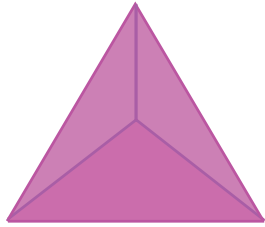
Faces Edges Vertices 

Name: \_\_\_\_\_

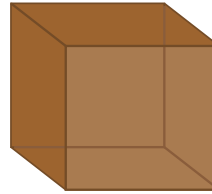
**Answer Key**

Write the name of each shape. Also, find the number of faces, edges and vertices.

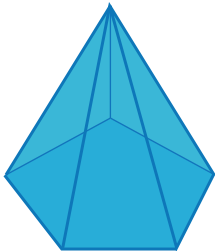
1)

Faces Edges Vertices Name: Triangular pyramid

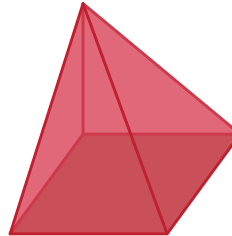
2)

Faces Edges Vertices Name: Cube

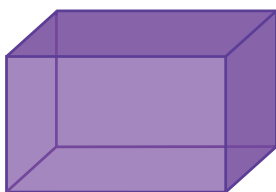
3)

Faces Edges Vertices Name: Pentagonal pyramid

4)

Faces Edges Vertices Name: Square pyramid

5)

Faces Edges Vertices Name: Rectangular prism

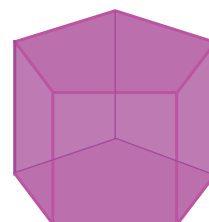
6)

Faces Edges Vertices Name: Hexagonal prism

7)

Faces Edges Vertices Name: Triangular prism

8)

Faces Edges Vertices Name: Pentagonal prism